

Name _____

Cut and Paste Symbol

Directions: Compare each set of numbers. Cut and paste the correct symbol Greater than (>), Smaller than (<) or Equal (=).

8

8

5

9

6

3

2

2

4

7

9

3

=

>

<

>

<

=

Name _____

Cut and Paste Symbol

Directions: Compare each set of numbers. Cut and paste the correct symbol Greater than (>), Smaller than (<) or Equal (=).

7

9

8

4

4

4

1

6

5

2

3

3

=

>

<

>

<

=

Name _____

Roll and Compare

Directions: Roll a dice twice. Fill in the numbers in each line respectively. Compare the numbers. Write the correct symbol Greater than ($>$), Smaller than ($<$) or Equal ($=$).

_____ _____

_____ _____

_____ _____

_____ _____

_____ _____

_____ _____

_____ _____

_____ _____

_____ _____


_____ _____

Name _____

Spin and Compare

Directions: Spin the spinner twice. Fill in the numbers in each line respectively. Compare the numbers. Write the correct symbol Greater than (>), Smaller than (<) or Equal (=).

_____ _____



_____ _____

_____ _____

_____ _____

_____ _____

_____ _____

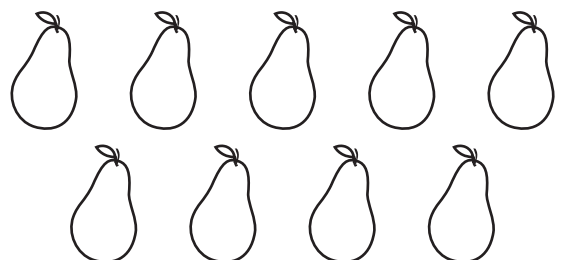
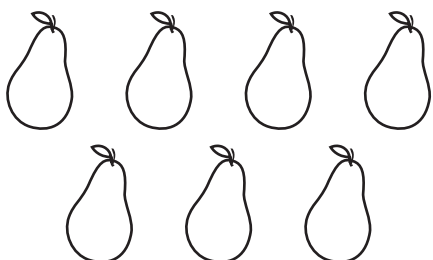










_____ _____

_____ _____

Name _____

Count and Compare



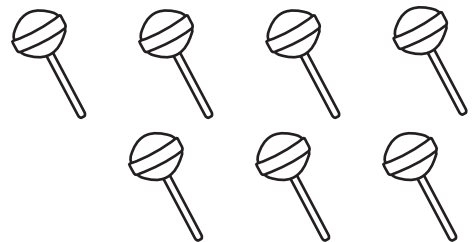

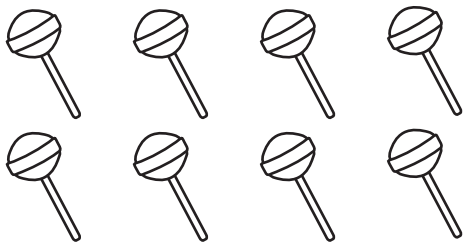


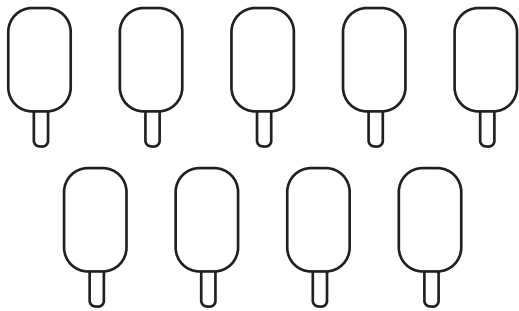



Directions: Count and compare the numbers. Write the correct symbol
Greater than (>) or Smaller than (<).



Name _____

Count and Compare

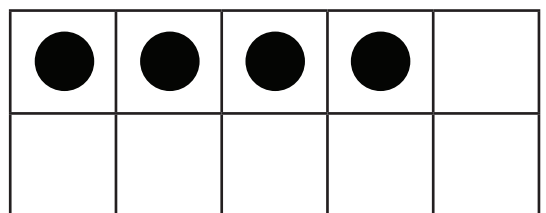
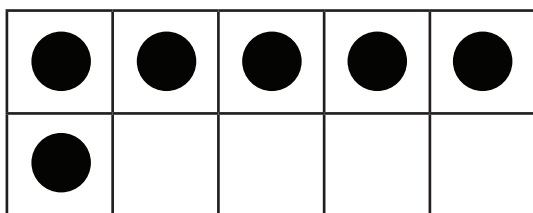

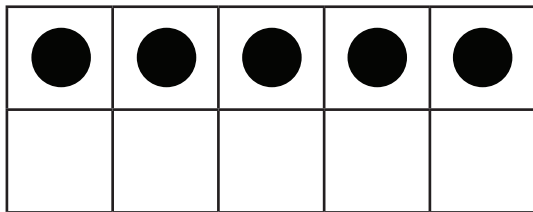
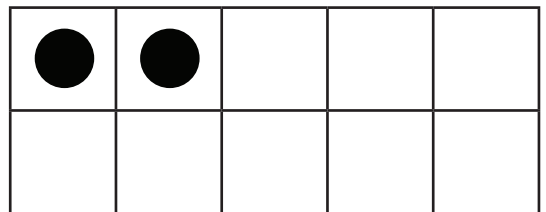
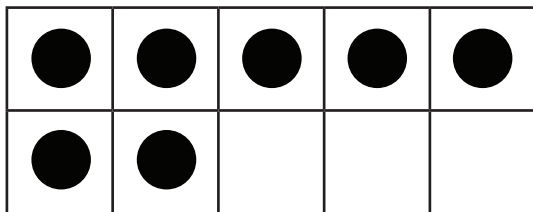
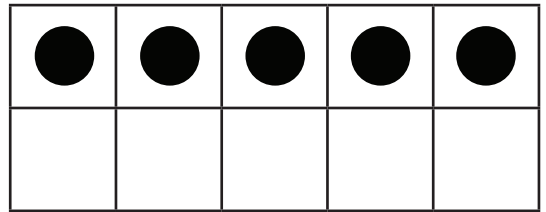
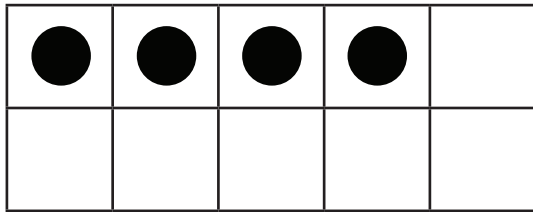

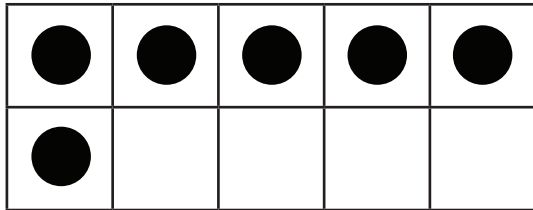
Directions: Count and compare the numbers. Write the correct symbol
Greater than (>) or Smaller than (<).



Name _____

Count and Compare


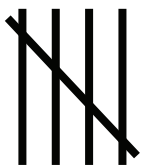




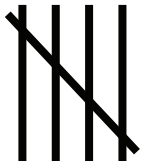
Directions: Count and compare the numbers. Write the correct symbol
Greater than (>) or Smaller than (<).



Name _____

Count and Compare




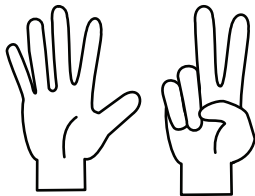



Directions: Count and compare the numbers. Write the correct symbol
Greater than (>) or Smaller than (<).



Name _____

Count and Compare

Directions: Count and compare the numbers. Write the correct symbol
Greater than (>) or Smaller than (<).



Name _____

Single Digit Number Compare

Directions: Compare each set of numbers. Write the correct symbol Greater than (>), Smaller than (<) or Equal (=).

7 7

9 3

8 9

6 8

5 4

3 7

1 2

6 6

8 7

3 5

Name _____

Single Digit Number Compare

Directions: Compare each set of numbers. Write the correct symbol Greater than (>), Smaller than (<) or Equal (=).

9 5

4 6

3 2

1 1

7 2

5 8

9 9

4 7

6 9

4 1

Name _____

Double Digit Number Compare

Directions: Compare each set of numbers. Write the correct symbol Greater than (>), Smaller than (<) or Equal (=).

19 20

12 10

13 11

16 19

10 10

15 12

18 14

11 10

15 15

14 17

Name _____

Double Digit Number Compare

Directions: Compare each set of numbers. Write the correct symbol Greater than (>), Smaller than (<) or Equal (=).

15 10

18 13

18 18

14 16

17 13

10 16

20 12

12 14

12 16

13 13